

**BUDHA DAL PUBLIC SCHOOL, PATIALA**  
**FIRST TERM EXAMINATION (September 2025)**

**Subject- EVS**

**Set- A**

**Class - 2**

**Date:\_\_\_\_\_**

**Name: \_\_\_\_\_**

**Roll No.: \_\_\_\_\_**

**Section: \_\_\_\_\_**

**Time: 2hrs30min**

**Maximum Marks: 60**

**A. Circle the correct option:**

**(6)**

i. We should play on the \_\_\_\_\_.

(a) road

(b) in the restaurant

(c) roof top

(d) benches

ii. A hobby is something we \_\_\_\_\_.

(a) like

(b) dislike

(c) both

(d) neither

iii. Our stomach helps in \_\_\_\_\_.

(a) breathing

(b) thinking

(c) digestion

(d) pumping

iv. Lungs are protected by \_\_\_\_\_.

(a) bones

(b) ribcage

(c) heart

(d) brain

v. Which of these carries and protects seeds?

(a) root

(b) leaf

(c) fruit

(d) stem

vi. Which of the following is a non-living thing?

(a) truck

(b) bear

(c) parrot

(d) lion

**B. Fill in the blanks:****(8)**

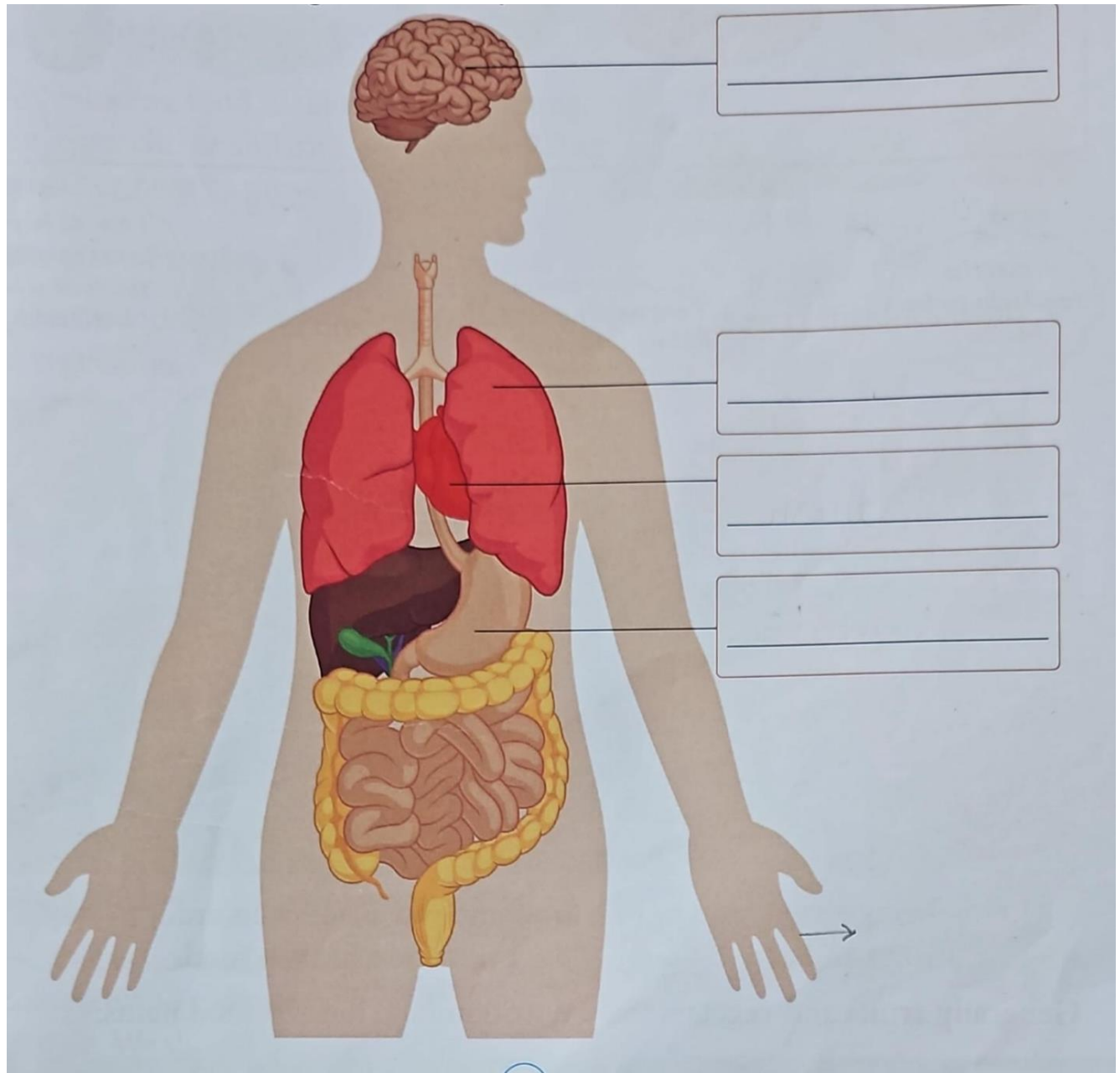
1. Always stand in a \_\_\_\_\_ while waiting for a bus.
2. All plants and \_\_\_\_\_ are living things.
3. Through \_\_\_\_\_, the food enters our stomach.
4. A child has more than \_\_\_\_\_ bones at the time of birth.
5. The children of same parents are \_\_\_\_\_.
6. A baby stem is called a \_\_\_\_\_.
7. Living things need food, \_\_\_\_\_ and \_\_\_\_\_.

**C. State whether the following statements are true or false.****(8)**

1. A lion is a living thing. \_\_\_\_\_
2. A cat does not produce a baby. \_\_\_\_\_
3. We should not litter on the road. \_\_\_\_\_
4. We should not follow safety rules to avoid accident. \_\_\_\_\_
5. A small family is also called a nuclear family. \_\_\_\_\_
6. Creepers have weak stems. \_\_\_\_\_
7. Bones protect our internal organs. \_\_\_\_\_
8. We should not fly kites on the road. \_\_\_\_\_

**D. Label the different organs of the body.**

**(4)**



**E. Unscramble the words:**

**(3)**

- i. USNIGLTH → \_\_\_\_\_
- ii. MIFLYA → \_\_\_\_\_
- iii. FTRFACI → \_\_\_\_\_

**F. Give answer in one word:****(6)**

i. The number of bones an adult has.

---

ii. The organ which helps us to breathe.

---

iii. A group of people who are related to each other.

---

iv. Write the name of one living thing.

---

v. Immediate help given to an injured person.

---

vi. The path people use to cross the road.

---

**G. Draw, colour and label the traffic light.****(4)**

**H. Write 'L' for living and 'NL' for non-living things.**

**(2)**



---



---







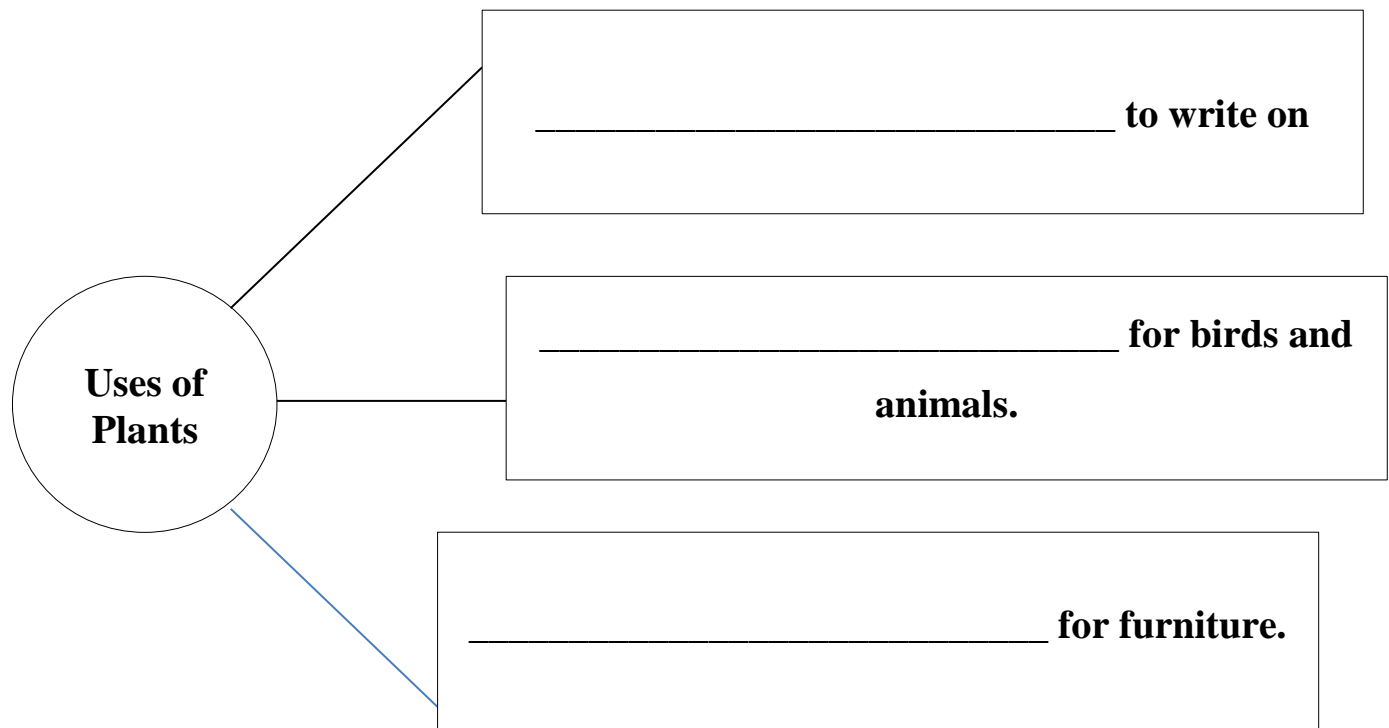
---



---

**I. Match the following:****(2)**

	Cotton
	Antiseptic liquid
	Bandage and scissors
	Painkillers

**J. Uses of things we get from plants.****(3)**

**K. Answer the following questions:****14M**

- i. Write any two safety rules we should follow on the road? **(2)**

---

---

---

- ii. What is a nuclear family? **(2)**

---

---

---

- iii. What is a zebra crossing? **(2)**

---

---

---

- iv. What is the function of a heart? **(2)**

---

---

---

v. What are the characteristics of living things? (2)

---

---

---

---

vi. What does a plant need to grow? (2)

---

---

---

---

vii. Write any two actions that are controlled by the brain? (2)

---

---

---

---